


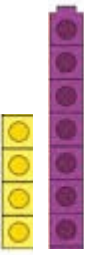
Finding the difference



The difference between
_____ and _____ is _____



The difference between
_____ and _____ is _____



The difference between
_____ and _____ is _____



The difference between
_____ and _____ is _____

The difference between 11 and 7 is

The difference between 6 and 3 is

The difference between 2 and 15 is

The difference between 10 and 1 is

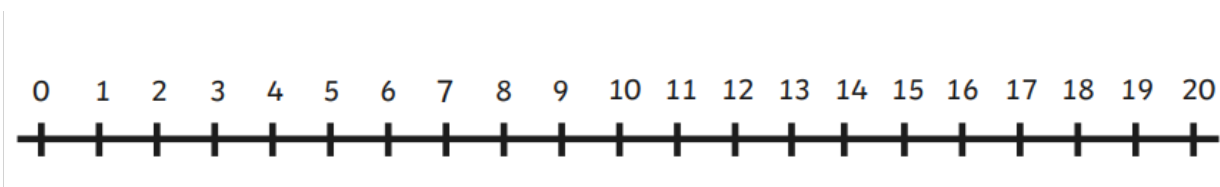
The difference between 20 and 19 is

The difference between 14 and 3 is

The difference between 13 and 10 is

The difference between 15 and 5 is

Now use the number line:



The difference between 9 and 20 is